



**YEAR 7 ENTRANCE AND
SCHOLARSHIP EXAMINATION**
Mathematics
Specimen Paper F

Your Last Name	
Your First Name	
Your Current School	
Candidate Number	

Time allowed for this paper: 1 hour

Instructions

- Attempt all the questions.
- Calculators must not be used.
- Show all of your working on this paper.
- There are 100 marks available in total for this test.
- You must not write in the squares on the bottom right of each page.
- The marks available for each part of a question are given in square brackets.

Calculate:

1. $2017 + 597$

Answer: _____ [2]

2. 63×42

Answer: _____ [2]

3. $6.48 \div 6$

Answer: _____ [2]

4. $7.257 - 3.47$

Answer: _____ [2]

Page total:

5. Write down the missing terms in each of the sequences below:

(a) 3, 9, _____, 21, 27, _____ [2]

(b) _____, 16, 8, 4, _____, 1 [2]

(c) 100, 132, 116, 124, 120, _____, _____ [2]

(d) 1, 2, 6, 24, _____, 720, _____ [2]

6. Circle the factors of 99:

9	198	990	33
66	11	18	48

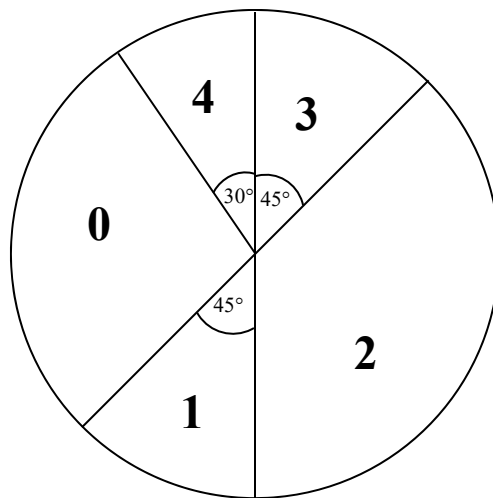
[2]

7. Subtract $20 + (1 \times 7)$ from $(20 + 1) \times 7$.

Answer: _____ [2]

Page total:

8. In a survey a group of children were asked how many films they had seen in the last week. No-one in the group had seen more than four films, and the results are shown in the pie chart below.



- (a) Work out the percentage of children who had seen exactly three films.

Answer: _____% [2]

- (b) Work out the fraction of children who had seen no films, giving your answer in its lowest terms.

Answer: _____ [3]

Nine of the children who were surveyed had seen exactly one film and another nine had seen exactly three films.

- (c) Fill in the table below to show the number of children who had seen 0, 2, and 4 films.

Number of films	0	1	2	3	4
Number of children surveyed		9		9	

[3]

Page total:

9. (a) Calculate $0.35 + \frac{4}{5} + \frac{37}{100}$, leaving your answer as a decimal.

Answer: _____ [3]

- (b) Write $\frac{21}{70}$ as a decimal.

Answer: _____ [2]

-
10. Simon and Fiona are sharing a cupboard. If Simon's things take up $\frac{2}{5}$ of the space and Fiona's things take up $\frac{2}{7}$ of the space, what fraction of the cupboard is empty?

Answer: _____ [3]

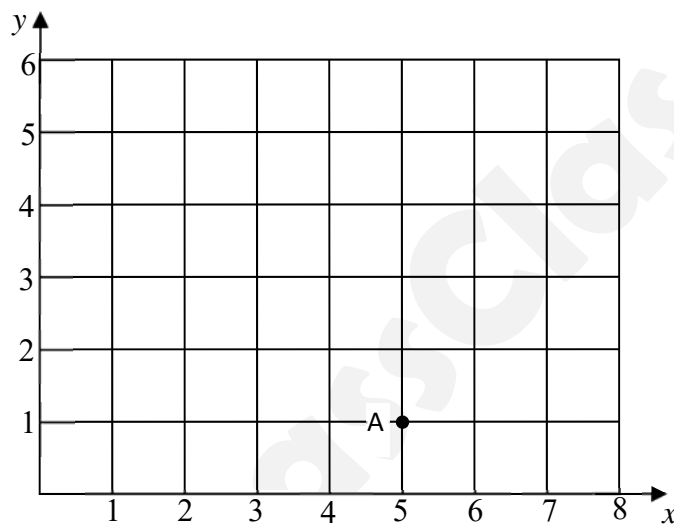
11. (a) Round 1619 to the nearest 10.

Answer: _____ [1]

- (b) Round 2017 to the nearest 100.

Answer: _____ [1]

-
12. A, B and C and D are 4 points on a grid. A is at (5, 1), B is at (1, 1) and C is at (1, 3) and D is at (5, 4).



- (a) Plot the points B, C and D and then connect them to form the quadrilateral ABCD.

[1]

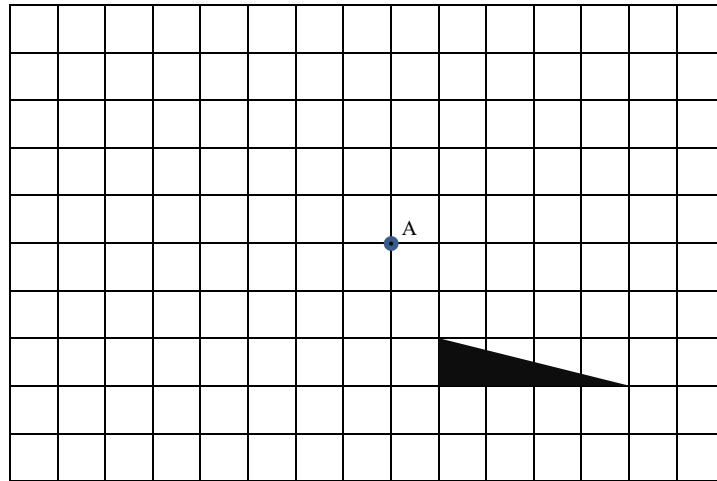
- (b) State what type of quadrilateral has been formed.

Answer: _____ [1]

- (c) The side length of each small square in the grid is 1 cm. Work out the area of the quadrilateral ABCD.

Answer: _____ cm² [2]

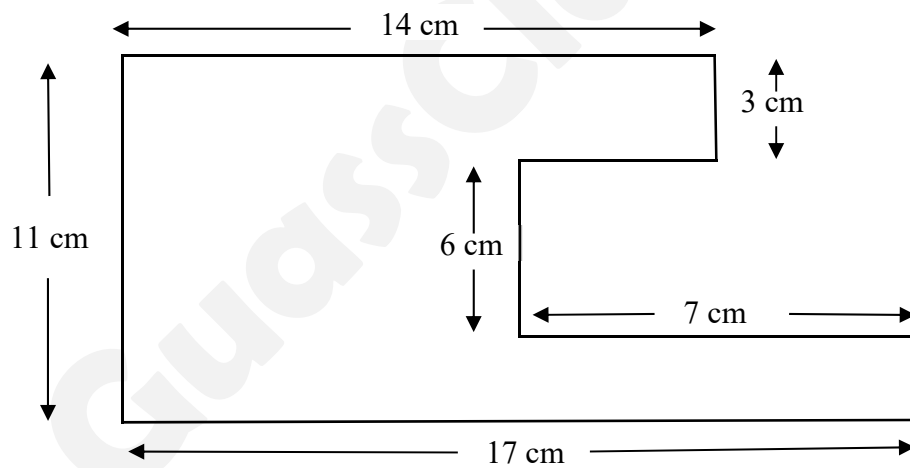
13. Rotate the triangle through 180° about the point marked A



[2]

14. Work out the perimeter of this shape.

Note: all angles are right angles but the diagram has not been drawn to scale.



Answer: _____ cm [3]

Page total:

15. The example below shows a quick way to work out the difference between two square numbers.

$$19^2 - 16^2 = (19 + 16)(19 - 16) = 35 \times 3 = 105$$

Use this method to work out the following:

(a) $17^2 - 13^2$

Answer: _____ [2]

(b) $888^2 - 112^2$

Answer: _____ [2]

(c) $7.5^2 - 2.5^2$

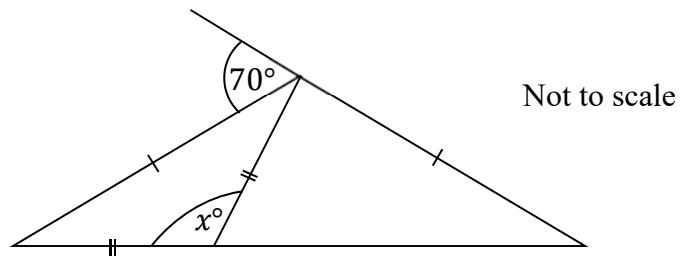
Answer: _____ [2]

-
16. The mean (average) of five numbers is 28. The mean of a different set of twelve numbers is 11. Calculate the mean of all of the numbers together.

Answer: _____ [3]

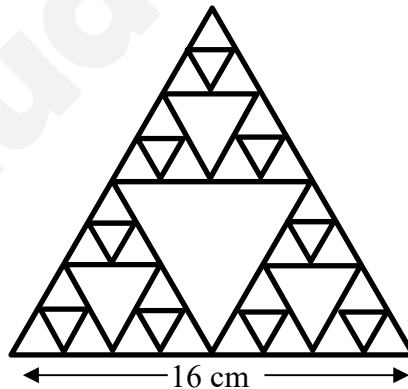
Page total:

17. Work out the value of x from the diagram below.



Answer: $x =$ _____ [3]

18. The shape below is made up of equilateral triangles. The side length of the largest triangle is 16 cm. Work out the total length of all of the lines used to draw the shape.



Answer: _____ cm [3]

Page total:

19. Jon has 30% more money than Miguel and together they have £46. Calculate how much money Jon has.

Answer: £ _____ [3]

20. A group of children are playing a game where they can score either 2, 3 or 5 points on each turn. The children have had 8 turns each and recorded their scores in a table, but some of the entries have been deleted. Fill in the missing numbers to give a complete set of scores.

Name	2 points	3 points	5 points	Total Score
Carl	1	6	1	25
Alex	4	2		
Yusuf		3		25
Jing				35
Charlotte				18

[6]

Page total:

21. Write each of the numbers 80, 81, 82, 83, 84 and 85 in the spaces below, using each number only once, to make all of the statements true.

_____ is a square number

_____ is a prime number

_____ is a multiple of 5

_____ is the product of two prime numbers

_____ is double a prime number

_____ is a multiple of 3

[4]

-
22. James cycles 4000m at 10 metres per second. Tom takes 100 seconds more to cycle the same distance. At what speed does Tom cycle?

Answer: _____ metres per second [3]

Page total:

23. The instruction $x \spadesuit y$ means double x and add y .

For example: $5 \spadesuit 3 = 2 \times 5 + 3 = 13$

(a) Work out the value of $14 \spadesuit 55$

Answer: _____ [2]

(b) What is the value of a if $9 \spadesuit a = 31$

Answer: _____ [2]

(c) What is the value of b if $b \spadesuit 10 = 16 \spadesuit b$

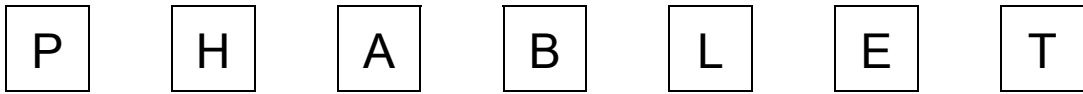
Answer: _____ [2]

(d) The numbers c and d are such that $c \spadesuit d = d \spadesuit c$. Work out the value of $d - c$.

Answer: _____ [2]

Page total:

24. The cards below have letters on one side, and the numbers 1, 2, 3, 4, 5, 6 and 7 on the other side (but not necessarily in this order on the cards).



You are told that:

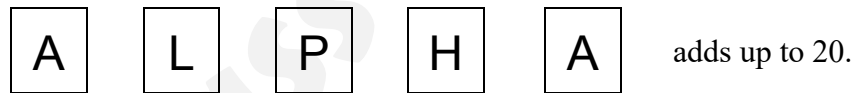


- (a) Find the value of

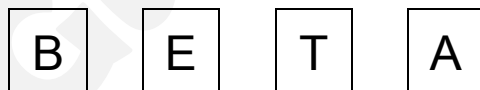
A

Answer: _____ [2]

You are also told that



- (b) Work out what the following add up to.

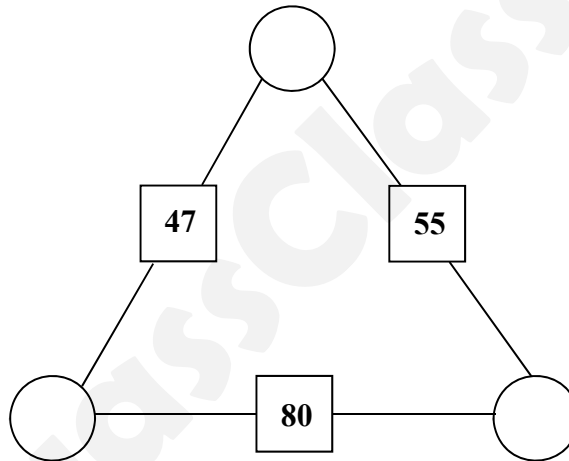
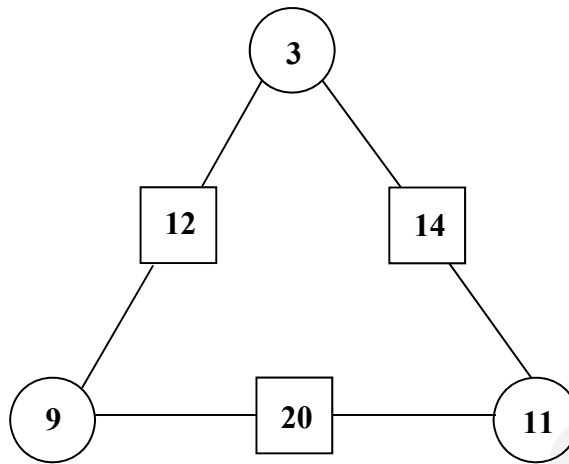


Answer: _____ [2]

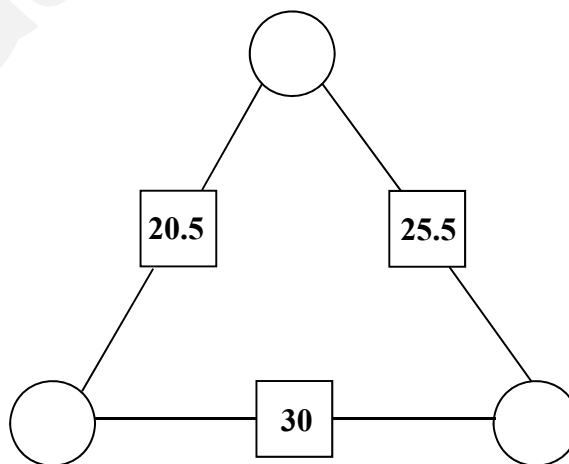
Page total:

--

25. Along any line drawn, the numbers in the two circles at the end of a line should add together to make the number in the square between the two circles, as in the first example. Fill the remaining circles with numbers obeying this rule.

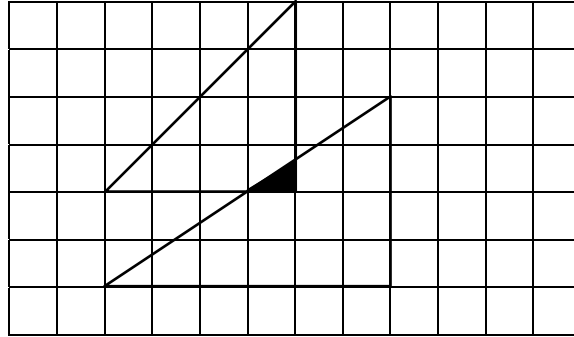


[2]

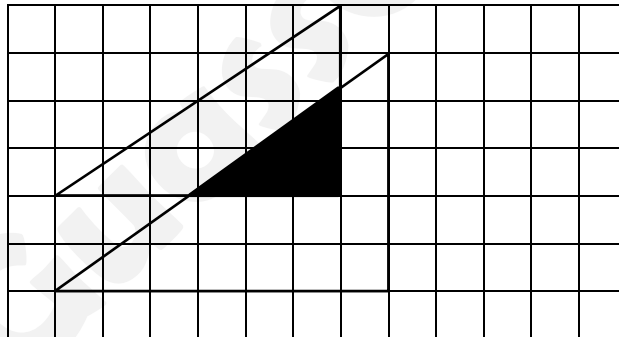


[3]

26. Each of the diagrams below shows a pair of triangles drawn on a grid of squares of side length 1cm and a smaller shaded triangle where these overlap. Each corner of each of the large triangles lies exactly at the corner of a square on the grid. Work out the area of the shaded triangle in each case.



Answer: _____ cm² [2]



Answer: _____ cm² [3]

End of the Examination

If you have time, go back and check your answers and make sure that you have shown all of your working.

www.GuysClasses.com